

On prend comme unité une bande rectangulaire (a-c) ou un grand carré (b-d-e-f). Quelle fraction de l'unité représente la partie coloriée ?



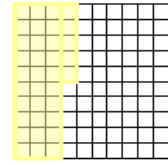
a.



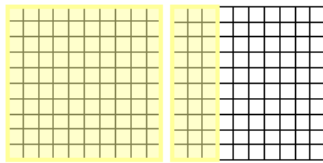
b.



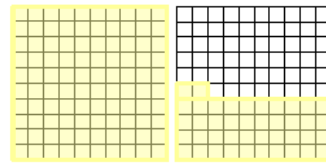
c. =



d.



e. = =




f. = =

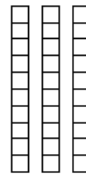
Pour chaque figure, colorie la partie qui représente la fraction indiquée.




a. $\frac{6}{10}$




b. $\frac{43}{100}$



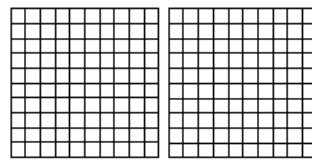
c. $\frac{24}{10}$



d. $\frac{8}{10}$



e. $\frac{161}{100}$



f. $1 + \frac{3}{10} + \frac{7}{100}$